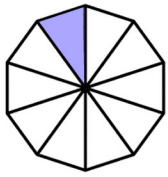


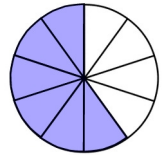
Mad Maths Minutes

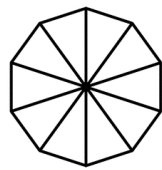
Recognising Tenths Set A



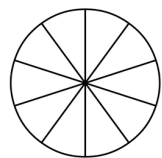
1 tenth

$$\frac{1}{10}$$

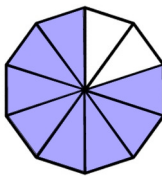


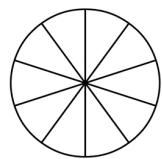


4 tenths

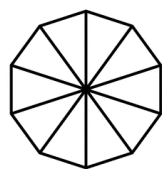


$$\frac{7}{10}$$

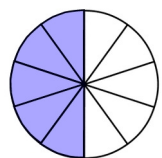




3 tenths

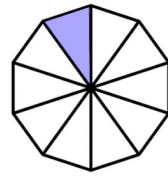


$$\frac{2}{10}$$



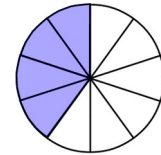
Mad Maths Minutes

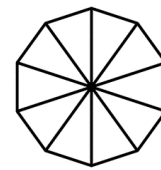
Recognising Tenths Set B



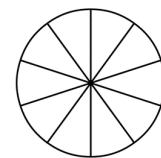
1 tenth

$$\frac{1}{10}$$

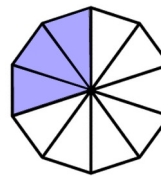


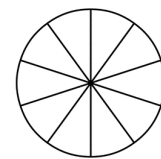


6 tenths

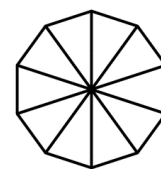


$$\frac{9}{10}$$





7 tenths



$$\frac{8}{10}$$

