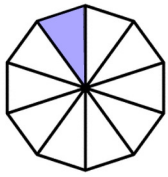


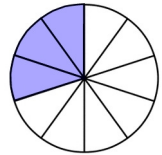
Mad Maths Minutes

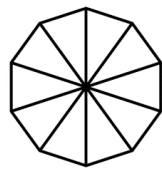
Recognising Tenths Set C



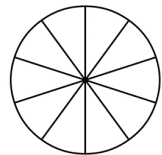
1 tenth

$$\frac{1}{10}$$

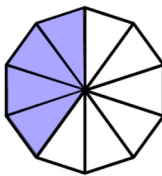


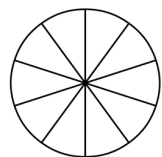


7 tenths

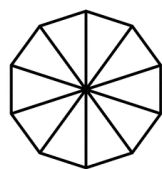


$$\frac{8}{10}$$

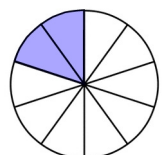




6 tenths

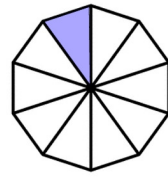


$$\frac{5}{10}$$



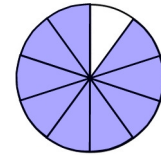
Mad Maths Minutes

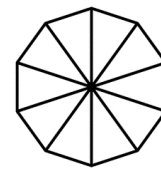
Recognising Tenths Set D



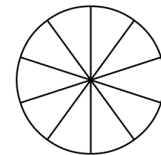
1 tenth

$$\frac{1}{10}$$

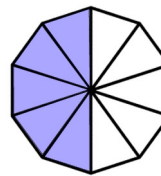


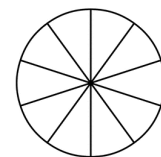


4 tenths

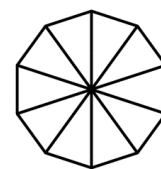


$$\frac{2}{10}$$





3 tenths



$$\frac{7}{10}$$

