



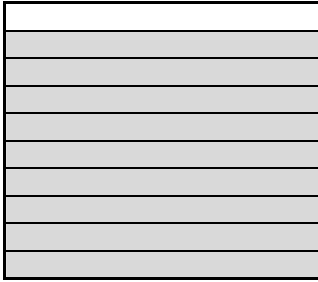






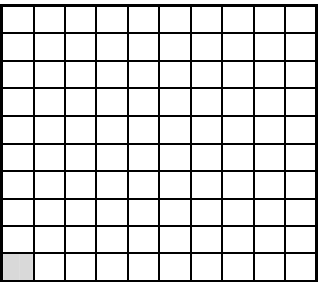





Writing Tenths and Hundredths as Percentages (1)



Name: _____

Date: _____

- Write as fractions and percentages...

 $\frac{3}{10}$ <input type="text" value="30%"/>	 $\frac{\quad}{10}$ <input type="text"/>	 $\frac{\quad}{10}$ <input type="text"/>
 $\frac{77}{100}$ <input type="text" value="77%"/>	 $\frac{\quad}{100}$ <input type="text"/>	 $\frac{\quad}{100}$ <input type="text"/>
 $\frac{\quad}{100}$ <input type="text"/>	 $\frac{\quad}{100}$ <input type="text"/>	 $\frac{\quad}{100}$ <input type="text"/>
 $\frac{\quad}{100}$ <input type="text"/>	 $\frac{\quad}{100}$ <input type="text"/>	 $\frac{\quad}{100}$ <input type="text"/>
 $\frac{\quad}{100}$ <input type="text"/>	 $\frac{\quad}{100}$ <input type="text"/>	 $\frac{\quad}{100}$ <input type="text"/>