

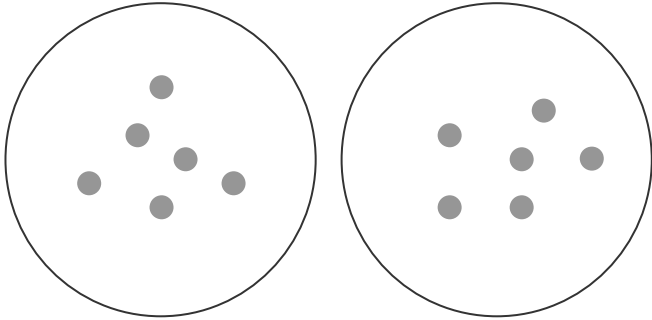
Division by Sharing (Word Problems 2)



Name:

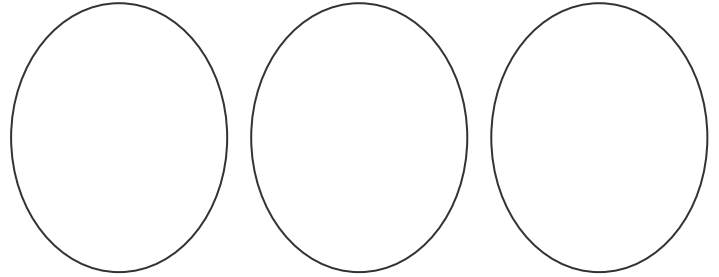
Date:

At the supermarket, dad shares 12 tins equally into two bags. How many tins does he put in each bag?



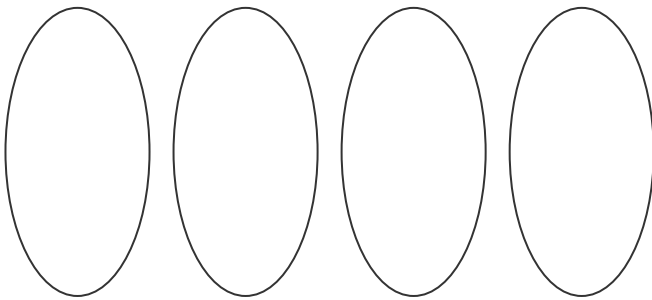
$$12 \div 2 = 6$$

Matthew, Emily and Harry share out 15 marbles. How many marbles do they get each?



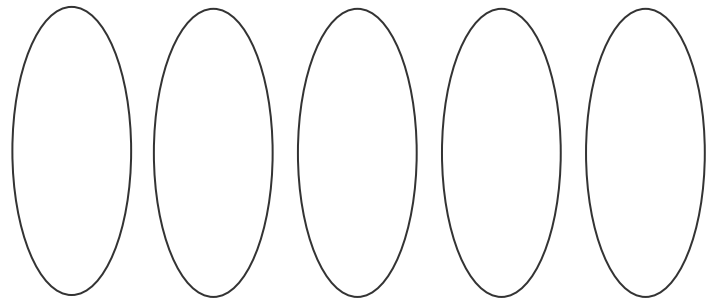
$$15 \div 3 =$$

Mandy has 28cm of sticky tape to wrap four small parcels. How much tape should she use on each one?



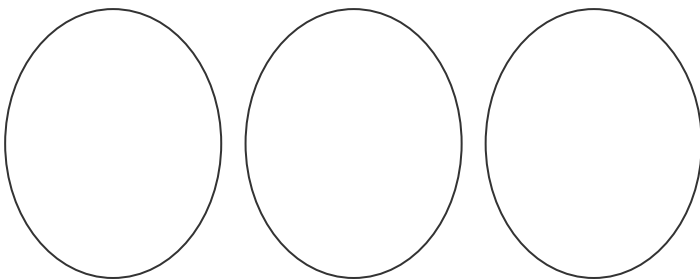
$$28 \div 4 =$$

15 scouts need to share five tents at their summer camp. How many scouts should stay in each tent?



$$15 \div 5 =$$

George spent 12 days in Italy visiting three cities. How many days did he stay in each one if he shared his time equally?



Class 2G has an equal number of boys and girls. If there are 18 children altogether, how many girls are there?

