











Ladybird Doubles



Name: _____

Date: _____

- Double the number of spots on each ladybird.

 Double 5 = <input type="text"/>	 Double 9 = <input type="text"/>
 Double 3 = <input type="text"/>	 Double 6 = <input type="text"/>
 Double 8 = <input type="text"/>	 Double 1 = <input type="text"/>
 Double 4 = <input type="text"/>	 Double 7 = <input type="text"/>
 Double 2 = <input type="text"/>	 Double 10 = <input type="text"/>

I can work out doubles of numbers up to 10.

