



Mad Maths Minutes

Write the doubles and answers Set C

 _____

 _____

 _____

 _____


 _____

 _____

 _____


 _____


 _____


 _____


Mad Maths Minutes

Write the doubles and answers Set D

 _____

 _____


 _____

 _____

 _____

 _____

 _____

 _____

 _____

 _____