

Multiplication Word Problems



Name: _____

Date: _____

Tom has 3 bags. He puts 4 sweets in each bag.




How many sweets does he have altogether?

$4 + 4 + 4$


3×4

Abbie has 2 fish bowls. She puts 7 fish in each bowl.



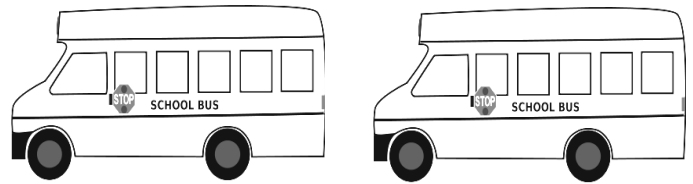
How many fish does Abbie have altogether?

Charlie has 3 baskets. She puts 5 apples in each basket.



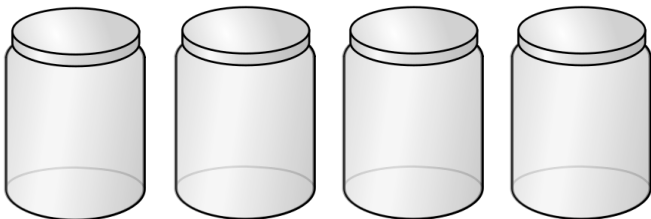
How many apples does Charlie have altogether?

A school has 2 buses. 9 children are put on each bus for a trip.




How many children does the school take on the trip?

Max has 4 jars. He puts 4 marbles in each jar.



How many marbles does Max have altogether?

Mary has 2 suitcases. She packs 8 t-shirts in each case.



How many t-shirts does Mary pack altogether?