


Multiplication Word Problems (2)



Name: _____

Date: _____

George has 2 frying pans. He fries 6 sausages in each pan.




How many sausages does George fry altogether?

$6 + 6$


6×2

There are 3 tables in a room. 6 people sit at each table.




How many people are there in the room?

Megan has 3 buckets. She puts 7 potatoes in each bucket.




How many potatoes does Megan have altogether?

Nick has 4 pencil pots. He puts 5 pencils in each pot.



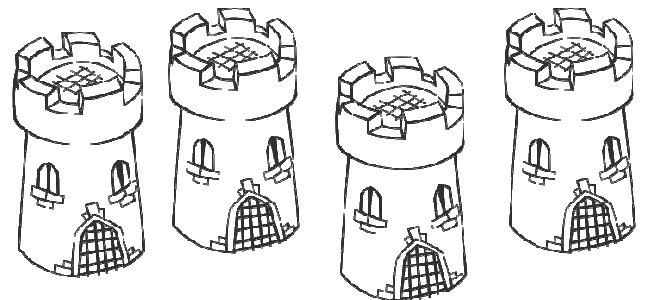
How many pencils does Nick have altogether?

There are 3 trees in a garden. 3 birds fly into each tree.



How many birds are there in the garden altogether?

A castle has 4 towers. 2 knights guard each tower.



How many knights guard the towers altogether?