


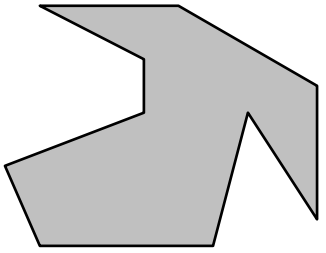


# Heptagons, Octagons, Nonagons and Decagons



Name: \_\_\_\_\_

Date: \_\_\_\_\_

			
Heptagon – 7 sides	Octagon – 8 sides	Nonagon – 9 sides	Decagon – 10 sides

- Carefully count the sides on each shape and write underneath whether it is a heptagon, octagon, nonagon or decagon. Draw a line on each side if it helps.

