

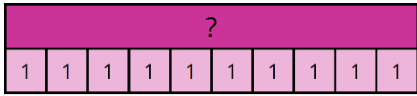
Mad Maths Minutes

1x Table Representations

Write the 1x table equation represented in each way.

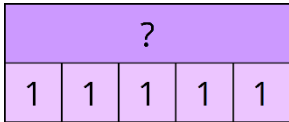






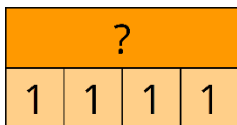














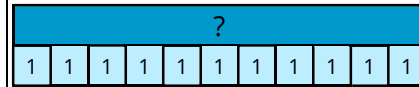
Mad Maths Minutes

1x Table Representations

Write the 1x table equation represented in each way.

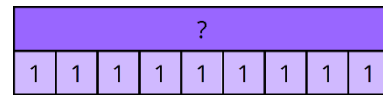






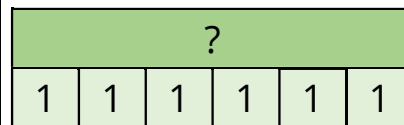














Mad Maths Minutes

1x Table Representations

Write the 1x table equation represented in each way.

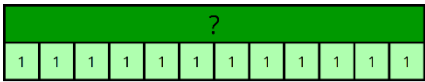

 _____

 _____

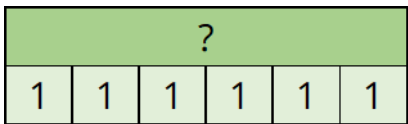
 _____



 _____

 _____

 _____


 _____

 _____

 _____


 _____

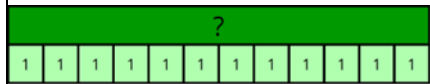
Mad Maths Minutes


1x Table Representations

Write the 1x table equation represented in each way.


 _____

 _____

 _____


 _____

 _____

 _____

 _____

 _____

 _____

 _____