

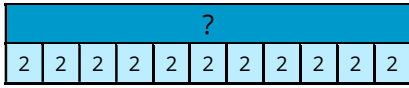
Mad Maths Minutes

2x Table Representations

Write the 2x table equation represented in each way.

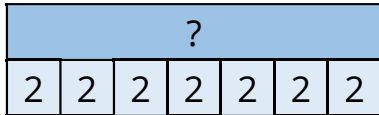






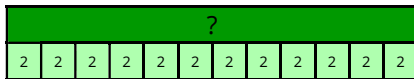















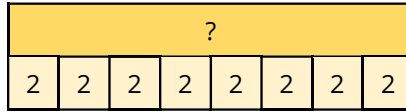
Mad Maths Minutes


2x Table Representations

Write the 2x table equation represented in each way.

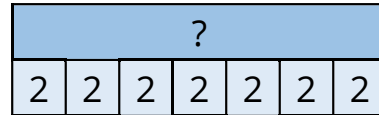






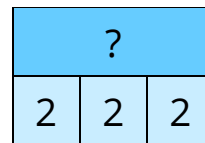














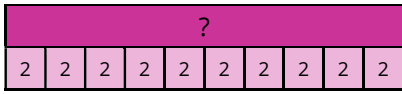
Mad Maths Minutes

2x Table Representations

Write the 2x table equation represented in each way.

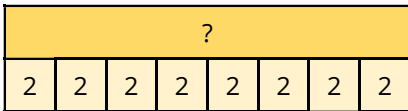






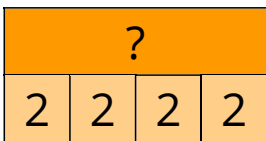














Mad Maths Minutes

2x Table Representations

Write the 2x table equation represented in each way.





