


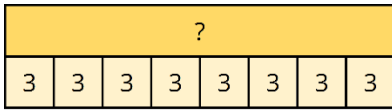
Mad Maths Minutes

3x Table Representations

Write the 3x table equation represented in each way.








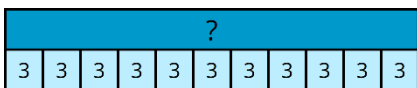
















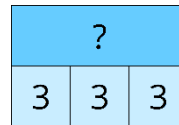
Mad Maths Minutes

3x Table Representations

Write the 3x table equation represented in each way.

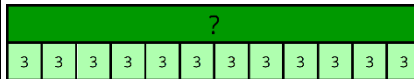







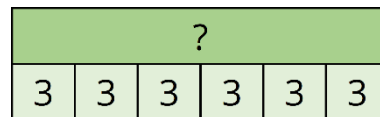















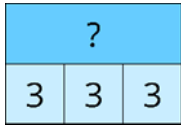
Mad Maths Minutes


3x Table Representations


Write the 3x table equation represented in each way.

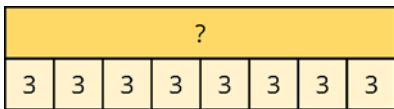






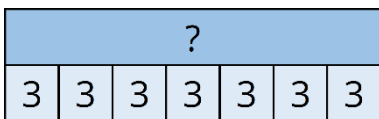














Mad Maths Minutes

3x Table Representations

Write the 3x table equation represented in each way.

