
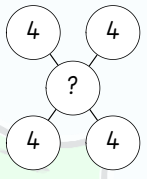
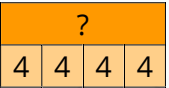




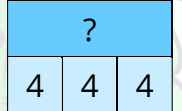





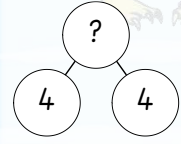




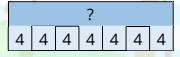

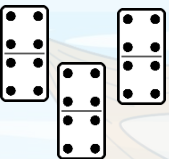




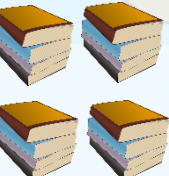
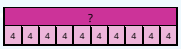
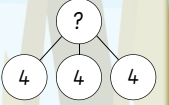



2×4				5×4			$4+4+4$	
		10 groups of 4		4×9			0×4	
12×4	$4+4+4+4+4+4$	7×4	4 multiplied by 11		10×4			6×4

www.snappymaths.com

Times Tables Tic-Tac-Toe

4x Table

4 squared	$4+4+4+4+4+4+4+4+4$		8×4		$4+4+4+4+4+4+4+4+4$			9 lots of 4
8 groups of 4	9×4			The product of 4 and 12	4×1			4×4
	4×3					11×4		4 multiplied by 12

Take it in turns. Say the value of the square then mark with your nought or cross. Get three in a row to win!