

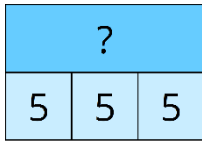
Mad Maths Minutes

5x Table Representations


Write the 5x table equation represented in each way.

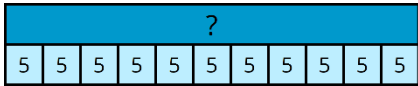







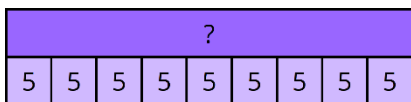















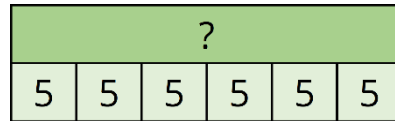
Mad Maths Minutes

5x Table Representations

Write the 5x table equation represented in each way.

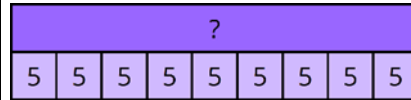






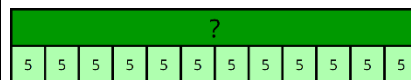
















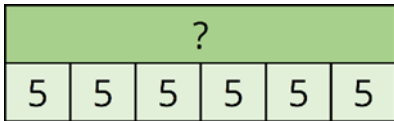
Mad Maths Minutes

5x Table Representations

Write the 5x table equation represented in each way.

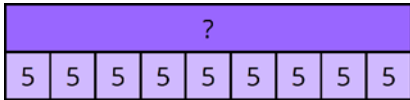






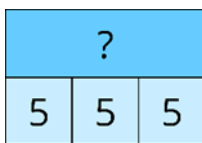














Mad Maths Minutes

5x Table Representations

Write the 5x table equation represented in each way.



