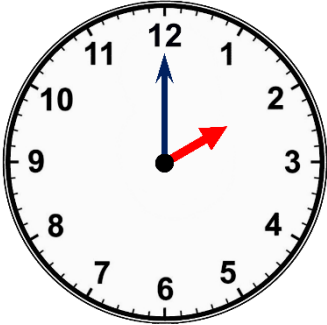
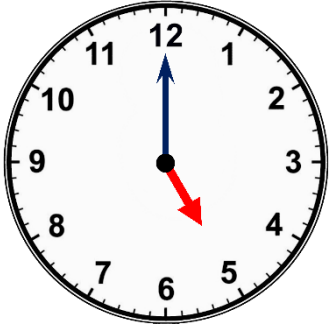
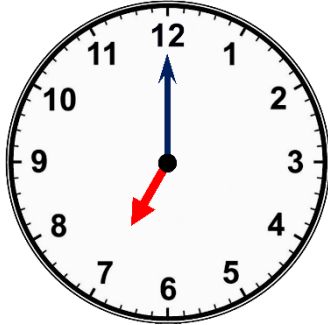


Telling the Time – O'clock R&PS

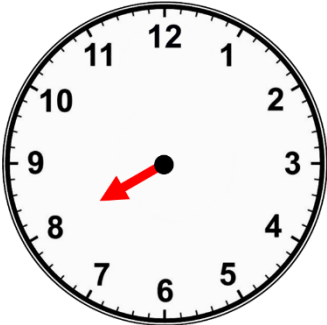
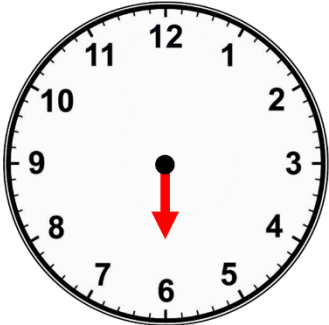
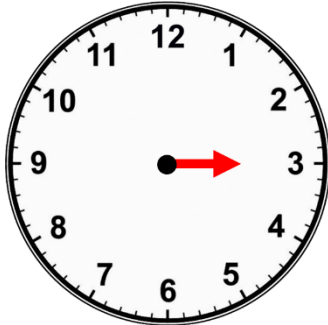
Name: _____

Date: _____

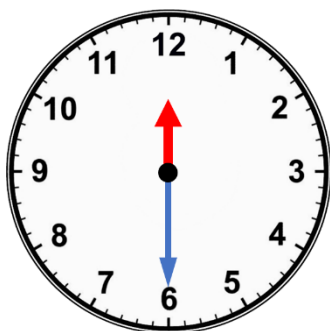
Write the time one hour earlier or one hour later than that shown.

one hour <i>later</i> than...	one hour <i>earlier</i> than...	one hour <i>earlier</i> than...
 _____	 _____	 _____

Oh no! The minute hand has been stolen. Can you still tell the time?

 _____	 _____	 _____
---	---	---

Bertie has drawn hands to show 6 o'clock.
Explain the mistake that Bertie has made.



True or False?

At 3 o'clock, the hour hand will point exactly to the 3. _____

At 9 o'clock the minute hand will be pointing to the 12. _____

A clock will show 7 o'clock twice in one day. _____

5 o'clock is one hour later than 6 o'clock. _____

LO: To explore o'clock times through reasoning and problem solving.



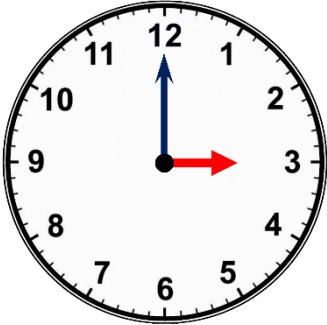
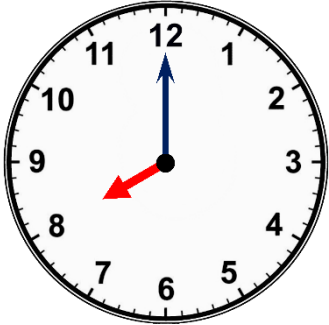
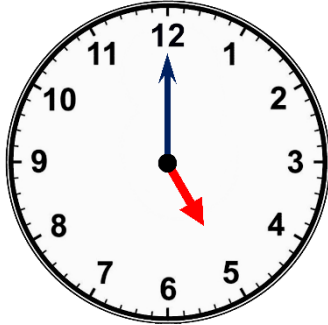


Telling the Time – O'clock R&PS

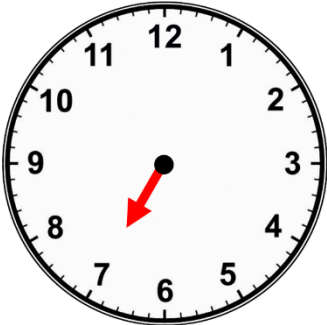
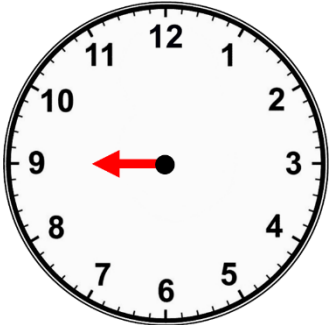
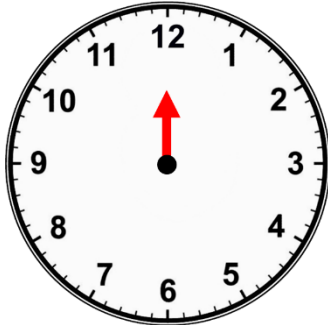
Name: _____

Date: _____

Write the time one hour earlier or one hour later than that shown.

one hour earlier than...	one hour later than...	one hour earlier than...
 _____	 _____	 _____

Oh no! The minute hand has been stolen. Can you still tell the time?

 _____	 _____	 _____
---	---	---

Bertie has drawn hands to show 10 o'clock.
Explain the mistake that Bertie has made.



True or False?

At 2 o'clock, the hour hand
will be pointing to the 12.

When it's an o'clock time,
both hands point to the 12.

1 o'clock is one hour later
than 12 o'clock.

At 6 o'clock, the minute
hand will be pointing to the
12.

LO: To explore o'clock times through reasoning
and problem solving.



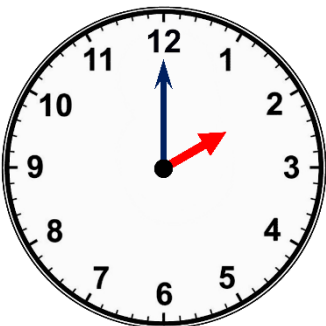
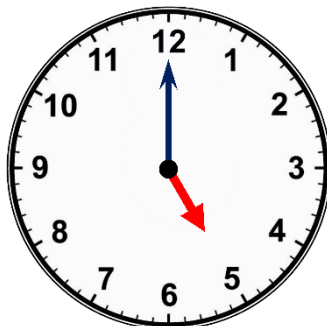
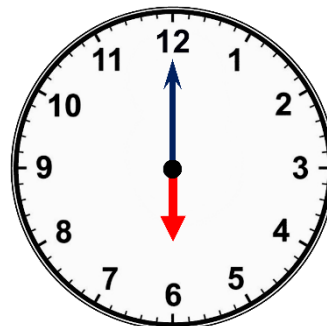


Telling the Time – O'clock R&PS

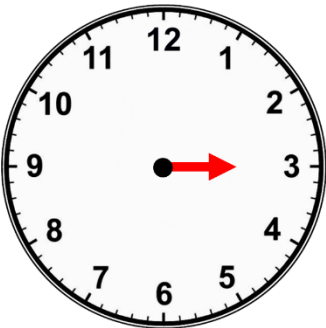
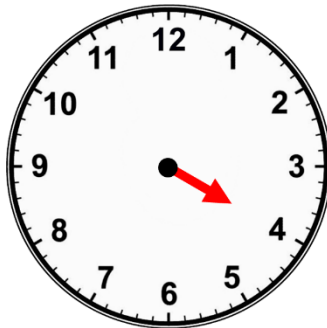
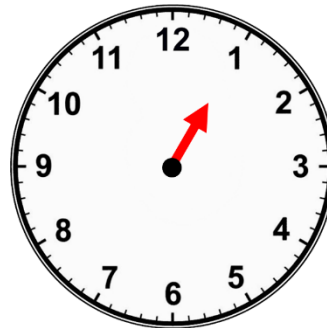
Name: _____

Date: _____

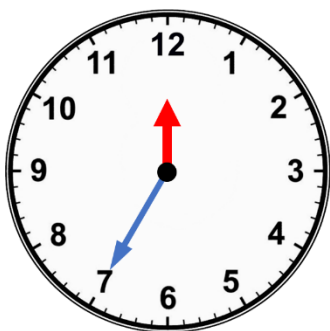
Write the time one hour earlier or one hour later than that shown.

one hour <i>later</i> than...	one hour <i>earlier</i> than...	one hour <i>later</i> than...
 _____	 _____	 _____

Oh no! The minute hand has been stolen. Can you still tell the time?

 _____	 _____	 _____
---	---	---

Bertie has drawn hands to show 7 o'clock.
Explain the mistake that Bertie has made.



True or False?

The minute hand goes around the clock once every hour. _____

At noon, both hands point to the 12. _____

At 11 o'clock, the hour hand will be pointing to the 12. _____

8 o'clock is one hour earlier than 7 o'clock. _____

LO: To explore o'clock times through reasoning and problem solving.



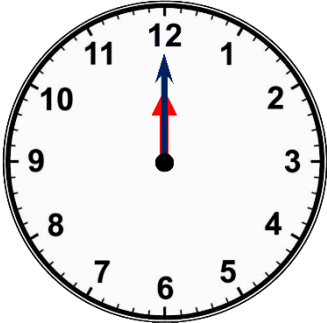
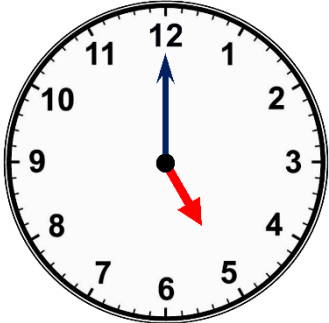
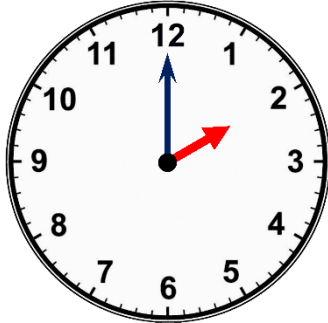


Telling the Time – O'clock R&PS

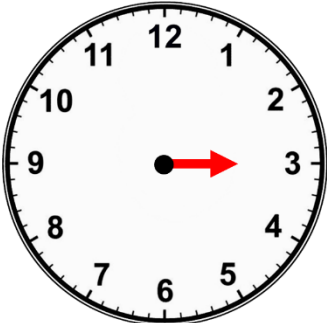
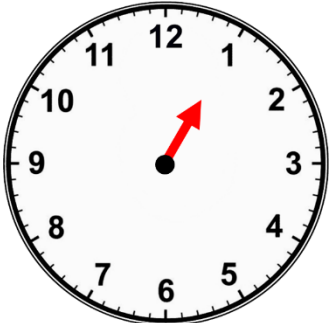
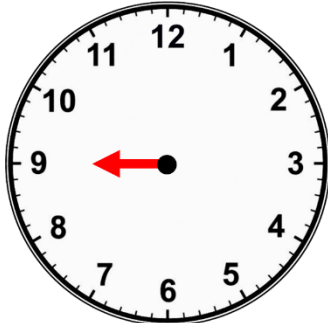
Name: _____

Date: _____

Write the time one hour earlier or one hour later than that shown.

one hour <i>later</i> than...	one hour <i>earlier</i> than...	one hour <i>later</i> than...
 _____	 _____	 _____

Oh no! The minute hand has been stolen. Can you still tell the time?

 _____	 _____	 _____
---	---	---

Bertie has drawn hands to show 11 o'clock.
Explain the mistake that Bertie has made.



True or False?

The hour hand points to the 8 twice in one day. _____

At 6 o'clock, the minute hand will be pointing to the 6. _____

When it's o'clock, the hour hand always points exactly to a number. _____

12 o'clock is one hour later than one o'clock. _____

LO: To explore o'clock times through reasoning and problem solving.

