

Write the Fraction – Whole, Halves and Quarters

Name: _____

Date: _____

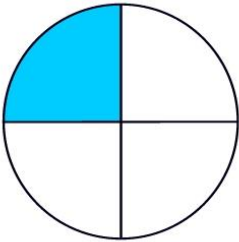

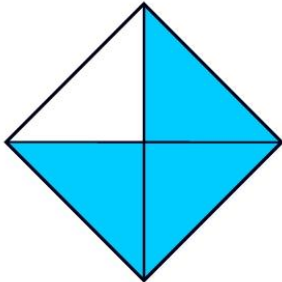

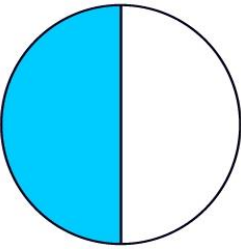


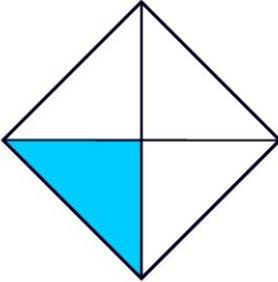

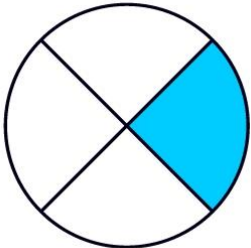
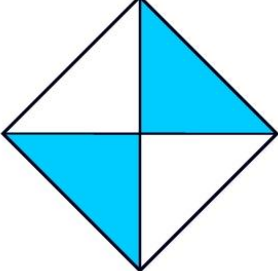

$\frac{1}{4}$ = one quarter

$\frac{1}{2}$ = one half

$\frac{2}{4}$ = two quarters

$\frac{3}{4}$ = three quarters

- What fraction of each shape is shaded?

 <input type="text"/>	 <input type="text"/>	 <input type="text"/>
 <input type="text"/>	 <input type="text"/>	 <input type="text"/>
 <input type="text"/>	 <input type="text"/>	 <input type="text"/>
 <input type="text"/>	 <input type="text"/>	 <input type="text"/>

- Do you notice anything about the $\frac{2}{4}$ shapes?

LO: To identify whole, half, quarter, two quarters and three quarters.

